

Please check the examination details below before entering your candidate information

Candidate surname

Other names

Pearson Edexcel
International GCSE (9–1)

Centre Number

--	--	--	--	--

Candidate Number

--	--	--	--	--

Monday 11 January 2021

Morning (Time: 2 hours)

Paper Reference **4CH1/1CR 4SD0/1CR**

Chemistry

Unit: 4CH1

Science (Double Award) 4SD0

Paper: 1CR

You must have:
Calculator, ruler

Total Marks

Instructions

- Use **black** ink or ball-point pen.
- **Fill in the boxes** at the top of this page with your name, centre number and candidate number.
- Answer **all** questions.
- Answer the questions in the spaces provided – *there may be more space than you need.*
- Show all the steps in any calculations and state the units.
- Some questions must be answered with a cross in a box . If you change your mind about an answer, put a line through the box and then mark your new answer with a cross .

Information

- The total mark for this paper is 110.
- The marks for **each** question are shown in brackets – *use this as a guide as to how much time to spend on each question.*

Advice

- Read each question carefully before you start to answer it.
- Write your answers neatly and in good English.
- Try to answer every question.
- Check your answers if you have time at the end.

Turn over ►

P67080A

©2021 Pearson Education Ltd.

1/1/1/



Pearson

Answer ALL questions.

1 The box lists some substances.

air	bromine	carbon	copper	glucose
nitrogen	oxygen	sulfur	water	

Choose substances from the box to answer these questions.

Each substance may be used once, more than once or not at all.

(a) Name a metallic element. (1)

(b) Name a compound. (1)

(c) Name a mixture. (1)

(d) Name an element that is a gas at room temperature. (1)

(e) Name an element that forms a basic oxide. (1)

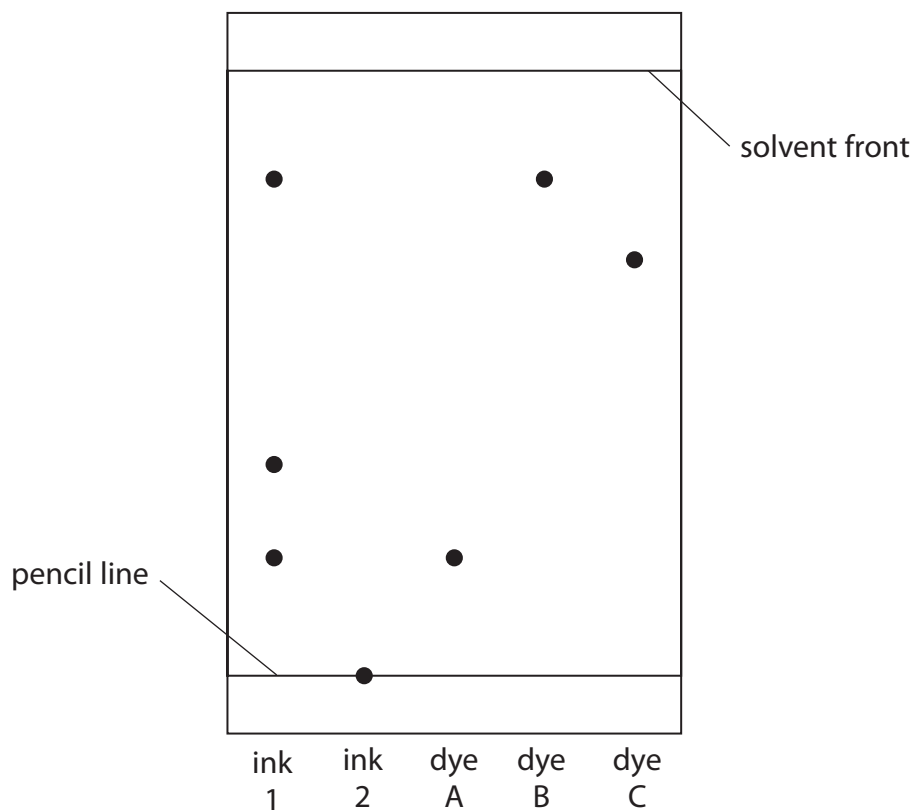
(f) Name two elements that are in the same group of the Periodic Table. (1)

(Total for Question 1 = 6 marks)



- 2 A student does a chromatography experiment using ink 1, ink 2, and three known dyes A, B and C. The student uses water as the solvent.

The diagram shows the student's chromatogram.



- (a) Deduce what conclusions can be made about the composition of ink 1.

(2)

.....

.....

.....

.....

- (b) (i) Give one conclusion that can be made about ink 2.

(1)

.....

.....



(ii) Suggest how the student could change the experiment to find the composition of ink 2.

(1)

(c) Calculate the R_f value of dye C, giving your answer to 2 significant figures.

(3)

R_f value =

(Total for Question 2 = 7 marks)

DO NOT WRITE IN THIS AREA

DO NOT WRITE IN THIS AREA

DO NOT WRITE IN THIS AREA



Turn over

3 Crude oil is a mixture of organic compounds.

Most of these compounds are members of the same homologous series.

(a) State the name of this homologous series.

(1)

(b) An industrial process is used to separate crude oil into fractions.

(i) The process depends on a difference in a property of the fractions.

What is this property?

(1)

- A boiling point
- B density
- C melting point
- D solubility

(ii) The boxes give some uses of fractions and some names of fractions.

Draw one straight line from each use to its correct fraction.

(3)

Use	Fraction
	<input type="checkbox"/> bitumen
<input type="checkbox"/> fuel for aeroplanes	<input type="checkbox"/> diesel
<input type="checkbox"/> fuel for ships	<input type="checkbox"/> fuel oil
<input type="checkbox"/> surfacing roads	<input type="checkbox"/> gasoline
	<input type="checkbox"/> kerosene



(c) Fuels obtained from the fractions may contain impurities.

Explain how the combustion of a common impurity in fuels may cause an environmental problem.

(3)

.....

.....

.....

.....

.....

.....

(d) Some of the fractions contain long-chain molecules which are not very useful.

(i) Give the name of the process used to convert long-chain molecules into more useful shorter-chain molecules.

(1)

.....

(ii) Give the catalyst and temperature used in the industrial process to convert long-chain molecules into shorter-chain molecules.

(2)

catalyst

temperature

(iii) When $C_{13}H_{28}$ is used in this process, three different molecules are formed.

Complete the equation for this reaction.

(2)



(Total for Question 3 = 13 marks)



4 When iron is left in damp air, rust forms on its surface.

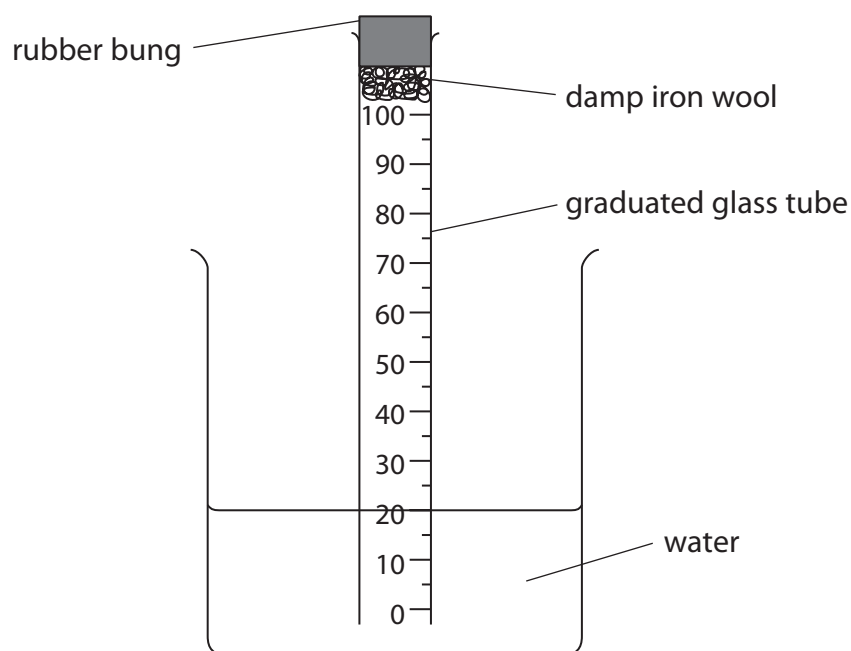
(a) (i) State the chemical name for rust.

(1)

(ii) Explain how a barrier method prevents rusting.

(2)

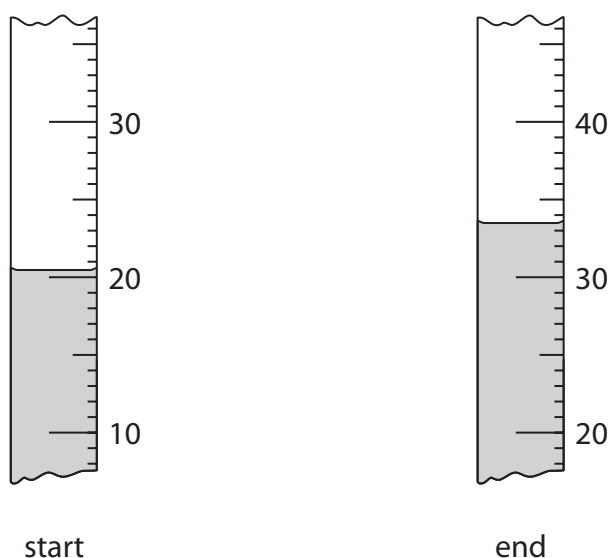
(b) A student uses this apparatus to find the approximate percentage by volume of oxygen in air.



This is the student's method.

- place a graduated glass tube in a beaker of water
- place some damp iron wool and a rubber bung in the top of the tube
- record the reading of the water level in the tube
- leave the apparatus for a few days
- record the reading of the water level again

The diagram shows the readings at the start and at the end of the experiment.



(i) Use the readings to complete the table, giving all values to the nearest 0.5 cm³.

(2)

reading at start in cm ³	20.5
reading at end in cm ³	
volume of oxygen used in cm ³	

(ii) The student uses these results to calculate the percentage by volume of oxygen in air.

Suggest why her calculated value is lower than the expected value.

(1)

.....

.....

.....



Turn over

(c) The student repeats the experiment using the same apparatus.

These are her results for the second experiment.

volume of air in tube at start = 80.0 cm^3

reading at start = 20.0

reading at end = 35.5

Use the results to calculate the percentage by volume of oxygen in air.

(3)

percentage = %

(Total for Question 4 = 9 marks)



DO NOT WRITE IN THIS AREA

DO NOT WRITE IN THIS AREA

DO NOT WRITE IN THIS AREA

BLANK PAGE

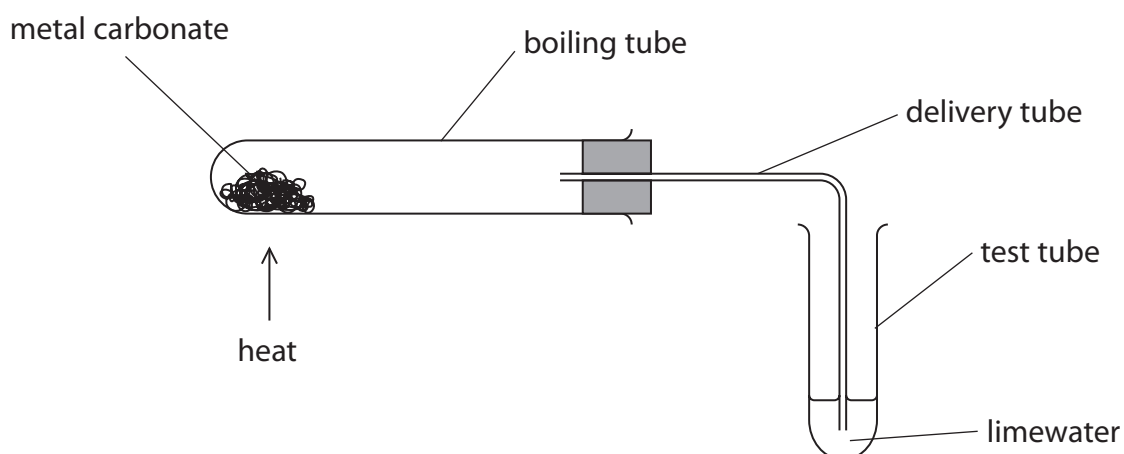


P 6 7 0 8 0 A 0 1 1 3 2



Turn over

5 A student uses this apparatus to investigate the effect of heat on different solid metal carbonates.



This is the student's method.

- use a spatula to put some metal carbonate in the boiling tube
- fit the delivery tube into position
- pour some limewater into the test tube
- start a timer and immediately begin to heat the metal carbonate
- record the time when a change first occurs in the limewater

The student repeats the method using different metal carbonates.

When a metal carbonate is heated a reaction sometimes occurs.

The equation for the reaction is



DO NOT WRITE IN THIS AREA

DO NOT WRITE IN THIS AREA

DO NOT WRITE IN THIS AREA



DO NOT WRITE IN THIS AREA

DO NOT WRITE IN THIS AREA

DO NOT WRITE IN THIS AREA

(a) State the name given to this type of reaction.

(1)

.....

(b) State two variables that the student should control in this investigation.

(2)

1

.....

2

.....

(c) Suggest why bubbles appear in the limewater immediately after heating has started but before there is any change to the metal carbonate.

(1)

.....

.....

.....

(d) Explain the purpose of limewater in this investigation.

(2)

.....

.....

.....

.....



(e) The table shows some of the results for the student's investigation.

Metal carbonate	Colour change of solid	Time taken for any change in limewater
calcium carbonate	remains white	90 seconds
sodium carbonate	remains white	no change
copper(II) carbonate		50 seconds

(i) State the colour change that occurs for copper(II) carbonate. (2)

from to

(ii) Give a chemical equation for this reaction of copper(II) carbonate. (1)

(f) (i) There is a relationship between the position of a metal in the reactivity series and how easily the metal carbonate reacts when heated.

Use the student's results and your own knowledge to deduce this relationship. (2)

(ii) State how you should extend the investigation to see if your deduction is correct. (1)

(Total for Question 5 = 12 marks)



DO NOT WRITE IN THIS AREA

DO NOT WRITE IN THIS AREA

DO NOT WRITE IN THIS AREA

BLANK PAGE



P 6 7 0 8 0 A 0 1 5 3 2



Turn over

6 Zinc reacts with dilute hydrochloric acid to form hydrogen.

(a) (i) Give a chemical equation for this reaction.

(2)

(ii) Give a test for hydrogen gas.

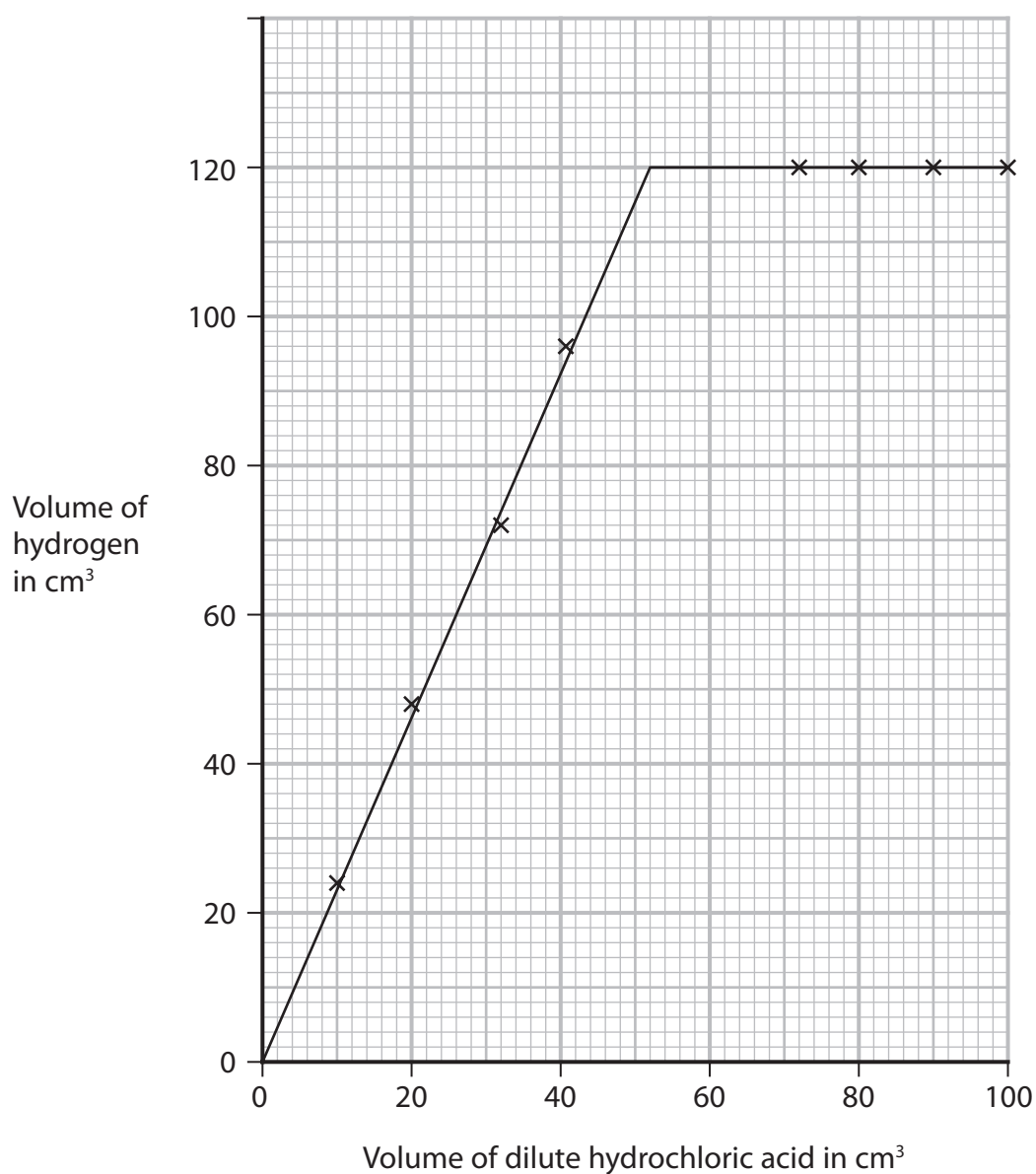
(1)

(b) A student investigates the reaction between pieces of zinc and dilute hydrochloric acid.

In each experiment, he uses the same mass of zinc but a different volume of the acid.

He collects the hydrogen and measures its volume in each experiment.

The graph shows the student's results.



(i) Use the graph to find the minimum volume of acid needed to react with all of the zinc.

(1)

(ii) The student repeats the investigation, using hydrochloric acid of double the original concentration.

Determine the volume of hydrogen that would be collected using 15 cm³ of this acid.

Show your working on the graph.

(2)

volume = cm³

(c) Explain how increasing the concentration of the hydrochloric acid affects the rate of reaction.

(3)

DO NOT WRITE IN THIS AREA

DO NOT WRITE IN THIS AREA

DO NOT WRITE IN THIS AREA



Turn over

DO NOT WRITE IN THIS AREA

DO NOT WRITE IN THIS AREA

DO NOT WRITE IN THIS AREA

BLANK PAGE



P 6 7 0 8 0 A 0 1 9 3 2



Turn over

7 The formation of ions and covalent bonds involves electrons.

The table gives the electronic configurations of atoms of hydrogen, lithium and chlorine.

Element	Electronic configuration of atom
hydrogen	1
lithium	2.1
chlorine	2.8.7

(a) Describe the different roles of electrons in the formation of

- ions in lithium chloride
- covalent bonds in hydrogen chloride

(3)

.....

.....

.....

.....

.....

.....

.....

.....

.....

.....



(b) Explain why lithium chloride has a higher melting point than hydrogen chloride.
Refer to structure and bonding in your answer.

(5)

DO NOT WRITE IN THIS AREA

DO NOT WRITE IN THIS AREA

DO NOT WRITE IN THIS AREA

Dotted lines for writing the answer.

(Total for Question 7 = 8 marks)



Turn over

8 (a) (i) Organic compounds can exist as isomers.

Explain what is meant by the term **isomers**.

(2)

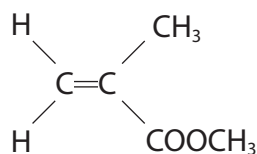
(ii) Organic compound Q reacts with bromine, without the presence of ultraviolet radiation, to form the compound $C_4H_8Br_2$

Draw the displayed formulae of two isomers of Q.

(2)

--	--

(b) An acrylic polymer can be formed from molecules with this structure.



(i) A student describes the molecule as an unsaturated hydrocarbon.

Explain whether this is a correct description.

(2)

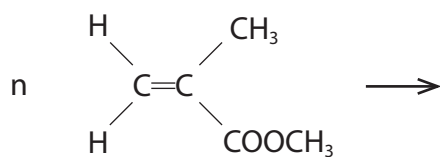
(ii) Name the type of polymerisation that occurs in the formation of the polymer.

(1)



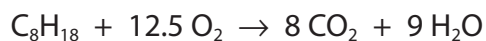
(iii) Complete the equation for the polymerisation reaction.

(2)



(c) Octane is a compound in petrol.

The equation for the complete combustion of octane is



(i) The fuel tank of a car contains 50.0 dm³ of octane.

Calculate the mass, in kg, of carbon dioxide formed if all the octane in the fuel tank undergoes complete combustion.

[mass of 1 dm³ of octane = 700 g]

(5)

mass =kg

(ii) State an environmental problem caused by carbon dioxide.

(1)

.....

.....

(Total for Question 8 = 15 marks)



Turn over



P 6 7 0 8 0 A 0 2 3 3 2

DO NOT WRITE IN THIS AREA

DO NOT WRITE IN THIS AREA

DO NOT WRITE IN THIS AREA

BLANK PAGE



9 Lithium, sodium and potassium are the first three elements in Group 1 of the Periodic Table.

(a) Suggest why these three elements are all stored in paraffin oil.

(1)

.....

.....

.....

(b) Caesium, Cs, is below potassium in Group 1.

(i) Give a similarity and a difference between the reactions of potassium with water and caesium with water.

(2)

similarity.....

.....

difference.....

.....

(ii) Give the chemical equation for the reaction between caesium and water.

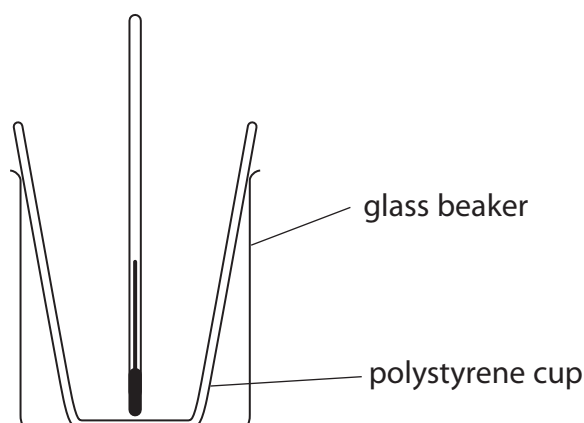
(2)

.....



- (c) A student investigates the temperature change in the reaction between dilute acids and solutions of Group 1 hydroxides.

He uses this apparatus.



This is the student's method.

- measure the temperature of 50 cm^3 of hydrochloric acid
- pour the acid into a polystyrene cup
- add 50 cm^3 of sodium hydroxide solution to the acid
- measure the maximum temperature of the mixture

- (i) Suggest what could be added to the apparatus to improve the experiment.

(1)

- (ii) Explain a change to the method that would improve the accuracy of the experiment.

(2)



(d) These are the student's results.

temperature of hydrochloric acid = 19.9 °C

maximum temperature of mixture = 26.5 °C

(i) Calculate the energy change, Q , in joules for this reaction.

[mass of 1.0 cm³ of mixture = 1.0 g]

[for the mixture, $c = 4.2 \text{ J/g/}^\circ\text{C}$]

(3)

$Q = \dots\dots\dots \text{ J}$

(ii) In the student's reaction between hydrochloric acid and sodium hydroxide, 0.050 mol of water forms.

Calculate the molar enthalpy change, ΔH , in kJ/mol for this reaction.

(2)

$\Delta H = \dots\dots\dots \text{ kJ/mol}$

(Total for Question 9 = 13 marks)



10 This question is about salts.

(a) Soluble salts can be prepared by the reaction between a metal oxide and an acid.

The equation for this type of reaction is



(i) State the name given to this type of reaction. (1)

(ii) State, in terms of protons, what happens in this reaction. (1)

(b) (i) A student is given 50 cm³ of dilute sulfuric acid and a bottle of solid copper(II) carbonate.

Describe the method that the student should use to prepare a saturated solution of copper(II) sulfate.

In your answer, refer to the pieces of apparatus that the student should use. (5)



(ii) The student produces dry crystals of hydrated copper(II) sulfate from the saturated solution.

He calculates that 6.40 g of dry crystals should be formed.

The mass of dry crystals he actually obtains is 1.80 g less than he calculated.

Calculate the student's percentage yield.

Give your answer to one decimal place.

(3)

percentage yield = %

DO NOT WRITE IN THIS AREA

DO NOT WRITE IN THIS AREA

DO NOT WRITE IN THIS AREA



P 6 7 0 8 0 A 0 2 9 3 2



Turn over

(c) (i) Gypsum is hydrated calcium sulfate.

A sample of gypsum contains 79% of calcium sulfate by mass.

Calculate the value of x in $\text{CaSO}_4 \cdot x\text{H}_2\text{O}$

[M_r of $\text{CaSO}_4 = 136$ M_r of $\text{H}_2\text{O} = 18$]

(3)

$x = \dots\dots\dots$

(ii) Describe a test for calcium ions in the sample of gypsum.

(2)

.....

.....

.....

.....

(Total for Question 10 = 15 marks)

TOTAL FOR PAPER = 110 MARKS



DO NOT WRITE IN THIS AREA

DO NOT WRITE IN THIS AREA

DO NOT WRITE IN THIS AREA

BLANK PAGE



DO NOT WRITE IN THIS AREA

DO NOT WRITE IN THIS AREA

DO NOT WRITE IN THIS AREA

BLANK PAGE

