

Please check the examination details below before entering your candidate information

Candidate surname

Other names

**Pearson Edexcel  
International GCSE**

Centre Number

--	--	--	--	--

Candidate Number

--	--	--	--	--

**Thursday 5 November 2020**

Morning (Time: 2 hours)

Paper Reference **4MA1/2F**

**Mathematics A  
Paper 2F  
Foundation Tier**



**You must have:**

Ruler graduated in centimetres and millimetres, protractor, pair of compasses, pen, HB pencil, eraser, calculator. Tracing paper may be used.

Total Marks

--

**Instructions**

- Use **black** ink or ball-point pen.
- **Fill in the boxes** at the top of this page with your name, centre number and candidate number.
- Answer **all** questions.
- Without sufficient working, correct answers may be awarded no marks.
- Answer the questions in the spaces provided – *there may be more space than you need.*
- **Calculators may be used.**
- You must **NOT** write anything on the formulae page. Anything you write on the formulae page will gain **NO** credit.

**Information**

- The total mark for this paper is 100.
- The marks for **each** question are shown in brackets – *use this as a guide as to how much time to spend on each question.*

**Advice**

- Read each question carefully before you start to answer it.
- Check your answers if you have time at the end.

Turn over ►

P62654A

©2020 Pearson Education Ltd.

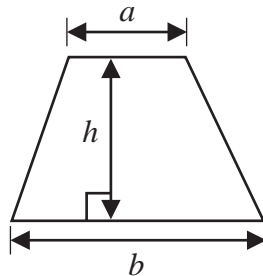
1/1/1/



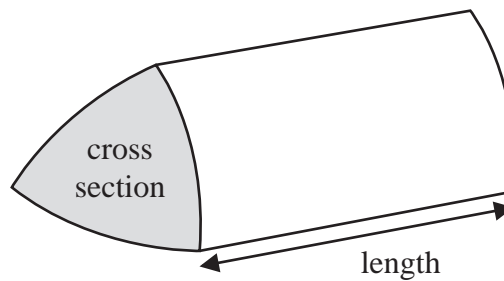
Pearson

International GCSE Mathematics  
Formulae sheet – Foundation Tier

Area of trapezium =  $\frac{1}{2}(a + b)h$

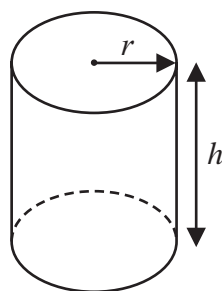


Volume of prism = area of cross section  $\times$  length



Volume of cylinder =  $\pi r^2 h$

Curved surface area of cylinder =  $2\pi r h$



DO NOT WRITE IN THIS AREA

DO NOT WRITE IN THIS AREA

DO NOT WRITE IN THIS AREA



DO NOT WRITE IN THIS AREA

DO NOT WRITE IN THIS AREA

DO NOT WRITE IN THIS AREA

Answer ALL TWENTY FOUR questions.

Write your answers in the spaces provided.

You must write down all the stages in your working.

1 Here is a list of numbers.

1	17	21	25	26	31	39	64
---	----	----	----	----	----	----	----

From this list, write down

(a) an even number

.....  
(1)

(b) a multiple of 3

.....  
(1)

(c) a prime number

.....  
(1)

(d) a cube number

.....  
(1)

(Total for Question 1 is 4 marks)

2 (a) Change 3 litres into millilitres.

.....millilitres  
(1)

(b) Change 6500 grams into kilograms.

.....kilograms  
(1)

(Total for Question 2 is 2 marks)



- 3 Paula asks 16 members of her class the number of pets they each have. Here are her results.

1 2 2 4 0 1 2 1  
3 3 4 1 1 0 3 2

- (a) Complete the frequency table for her results.

Number of pets	Tally	Frequency
0		
1		
2		
3		
4		

(2)

- (b) Write down the mode for the number of pets.

.....  
(1)

- (c) Work out the range for the number of pets.

.....  
(1)

**(Total for Question 3 is 4 marks)**



DO NOT WRITE IN THIS AREA

DO NOT WRITE IN THIS AREA

DO NOT WRITE IN THIS AREA

4 The table gives the minimum temperature for January 2018 in each of six cities.

City	Minimum temperature (°C)
Barcelona	3
Donetsk	-10
Mexico City	-1
Mombasa	22
New York	-15
Sydney	15

(a) Which of these six cities has the lowest minimum temperature?

.....  
(1)

(b) Work out the difference between the minimum temperature of Donetsk and the minimum temperature of Sydney.

.....°C  
(1)

The minimum temperature in Edmonton for January 2018 was 50°C less than the minimum temperature in Mombasa for January 2018

(c) Work out the minimum temperature in Edmonton for January 2018

.....°C  
(1)

(Total for Question 4 is 3 marks)



Turn over

5 (a) Write these decimals in order of size.  
Start with the smallest decimal.

0.9      0.035      0.003      0.539      0.5

.....  
(1)

(b) Write 0.6 as a percentage.

..... %

(1)

(c) Write  $\frac{60}{7}$  as a mixed number.

.....  
(1)

(d) Work out the difference between  $\frac{19}{20}$  and 0.68  
Give your answer as a decimal.

.....  
(2)

**(Total for Question 5 is 5 marks)**



DO NOT WRITE IN THIS AREA

DO NOT WRITE IN THIS AREA

DO NOT WRITE IN THIS AREA

6 Here are the first five terms of a number sequence.

3      7      11      15      19

(a) Write down the next term of the sequence.

.....  
(1)

(b) Explain how you worked out your answer.

.....  
(1)

(c) Find the first number greater than 70 that is in the sequence.

.....  
(2)

Ada says,

“96 is a number in the sequence”

(d) Is Ada correct?

You must give a reason for your answer.

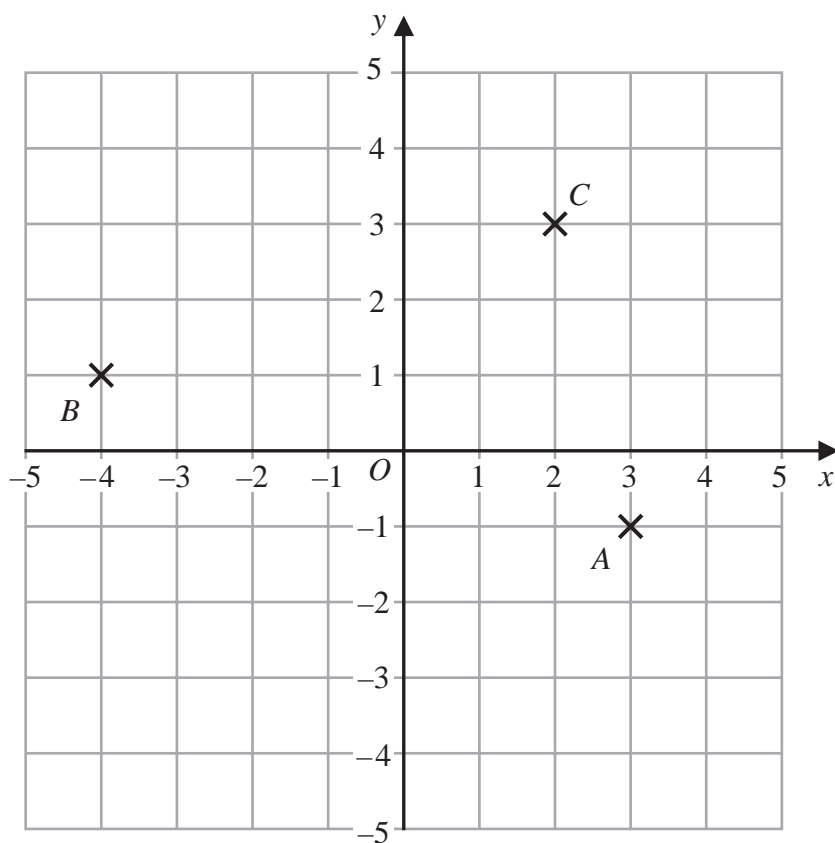
.....  
.....  
(1)

**(Total for Question 6 is 5 marks)**



Turn over

7 The diagram shows three points,  $A$ ,  $B$  and  $C$ , marked on a grid.



(a) Write down the coordinates of point  $A$ .

(....., .....)  
(1)

The coordinates of the point  $D$  are  $(-2, -4)$

(b) On the grid, mark with a cross ( $\times$ ) the position of  $D$ .  
Label the cross  $D$ .

(1)

(c) Find the coordinates of the midpoint of  $BC$ .

(....., .....)  
(2)

(d) On the grid, draw the line with equation  $x = 4$

(1)

(Total for Question 7 is 5 marks)





DO NOT WRITE IN THIS AREA

DO NOT WRITE IN THIS AREA

DO NOT WRITE IN THIS AREA

8 Lucas is going on a country walk.

Lucas works out how long each part of his walk will take.  
This information is shown in the following table.

	<b>Time taken</b>
Walk from home to Village A	20 minutes
Walk from Village A to Village B	35 minutes
Stop for lunch in Village B	1 hour 15 minutes
Walk from Village B to home	30 minutes

Lucas leaves home at 11 10

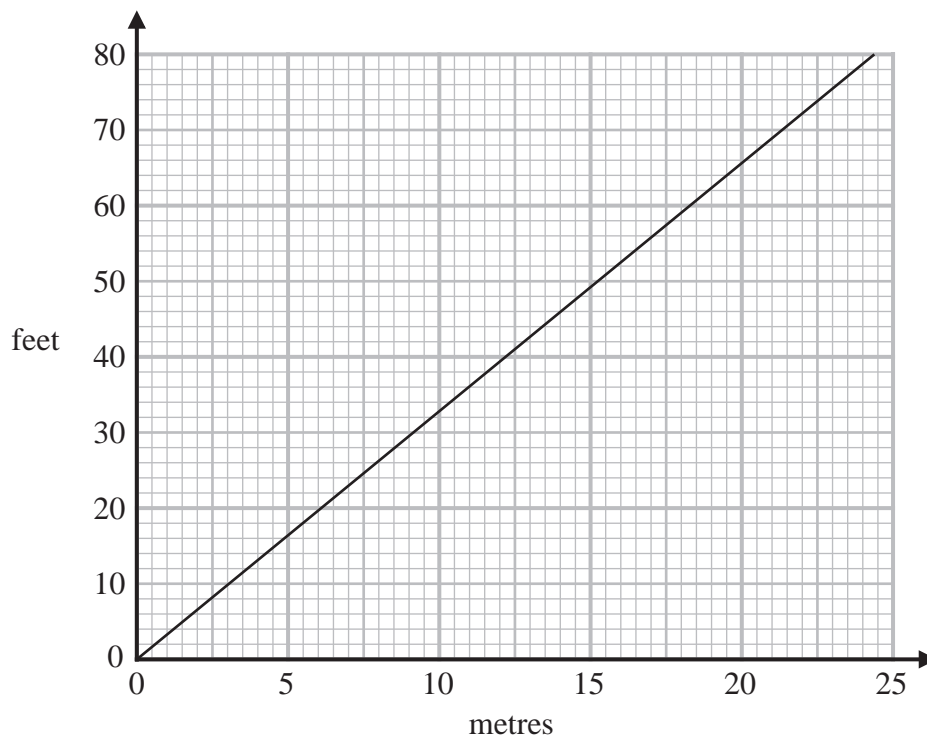
At what time will Lucas get home?

(Total for Question 8 is 3 marks)



Turn over

9 Below is a conversion graph to change between metres and feet.



(a) Use the graph to change

(i) 10 metres to feet,

.....feet

(ii) 50 feet to metres.

.....metres

(2)

Joss lives 820 metres above sea level.

Nicky lives 2850 feet above sea level.

(b) Which is the greater, 820 metres or 2850 feet?

You must show how you get your answer.

(2)

(Total for Question 9 is 4 marks)



DO NOT WRITE IN THIS AREA

DO NOT WRITE IN THIS AREA

DO NOT WRITE IN THIS AREA

10 Hugo records the number of pairs of trainers sold in each of four shoe shops last Saturday. He is going to draw a pie chart for his results.

The incomplete table shows two of Hugo's results and the sizes of three of the angles in his pie chart.

Name of shop	Number of pairs of trainers	Angle in pie chart
ABC Shoes	.....	30°
Kilian Stuart Sports	18	45°
One Stop Shoes	48	..... °
Superfast Trainers	.....	165°

Complete the table.

(Total for Question 10 is 4 marks)



Turn over



P 6 2 6 5 4 A 0 1 1 2 4

11 Work out 23% of 450 millilitres.

.....millilitres

(Total for Question 11 is 2 marks)

12 (a) Write down all the factors of 9

.....  
(1)

(b) Find the lowest common multiple (LCM) of 15 and 70

.....  
(2)

(Total for Question 12 is 3 marks)

DO NOT WRITE IN THIS AREA

DO NOT WRITE IN THIS AREA

DO NOT WRITE IN THIS AREA



DO NOT WRITE IN THIS AREA

DO NOT WRITE IN THIS AREA

DO NOT WRITE IN THIS AREA

13 The diagram shows the plan of Sophia's gym floor.

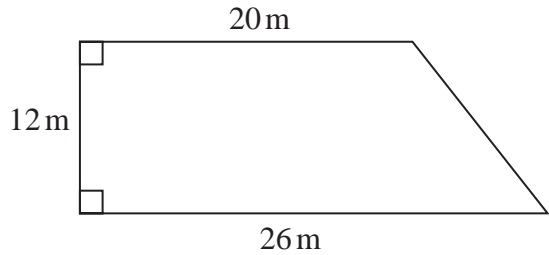


Diagram NOT accurately drawn

Sophia is going to paint all the gym floor.

Each tin of paint she is going to use covers an area of  $20\text{ m}^2$

There is a special offer on the paint that Sophia is going to buy.

**Special Offer**  
1 tin for \$13  
4 tins for \$40

Work out the least amount of money that Sophia has to pay in order to buy all the paint she needs.  
Show your working clearly.

\$ .....

(Total for Question 13 is 5 marks)



Turn over

14 (a) Factorise  $25f - 10$

.....  
(1)

(b) Make  $y$  the subject of the formula  $c = 5y - h$

.....  
(2)

(c) Solve the inequality  $4x + 7 > 2$

.....  
(2)

(Total for Question 14 is 5 marks)

15 Show that  $\frac{2}{5} \div \frac{11}{20} = \frac{8}{11}$

(Total for Question 15 is 2 marks)



DO NOT WRITE IN THIS AREA

DO NOT WRITE IN THIS AREA

DO NOT WRITE IN THIS AREA

16 The table shows information about the lengths of time, in minutes, 120 customers spent in a supermarket.

Length of time ( $L$ minutes)	Frequency
$20 < L \leq 30$	6
$30 < L \leq 40$	26
$40 < L \leq 50$	31
$50 < L \leq 60$	40
$60 < L \leq 70$	17

(a) Write down the modal class.

.....  
(1)

(b) Work out an estimate for the mean length of time spent by the 120 customers in the supermarket.

.....minutes  
(4)

(Total for Question 16 is 5 marks)



Turn over

17 Here is a list of ingredients needed to make apple crumble for 6 people.

Apple Crumble
Ingredients for 6 people
12 apples 150g butter 195g flour 90g oats 120g sugar

Nadiya wants to make apple crumble for 14 people.

(a) Work out the amount of butter she needs.

..... 50  
(2)

Alison makes apple crumble for a group of people.

She uses 630 g of oats.

(b) Work out the number of people in the group.

.....  
(2)

DO NOT WRITE IN THIS AREA

DO NOT WRITE IN THIS AREA

DO NOT WRITE IN THIS AREA





DO NOT WRITE IN THIS AREA

DO NOT WRITE IN THIS AREA

DO NOT WRITE IN THIS AREA

At a cake sale, Michael sells some lemon cakes and some chocolate cakes.

the number of lemon cakes he sells : the number of chocolate cakes he sells = 2 : 7

Michael sells a total of 162 cakes.

(c) Work out the number of lemon cakes Michael sells.

.....  
(2)

**(Total for Question 17 is 6 marks)**



Turn over



P 6 2 6 5 4 A 0 1 7 2 4

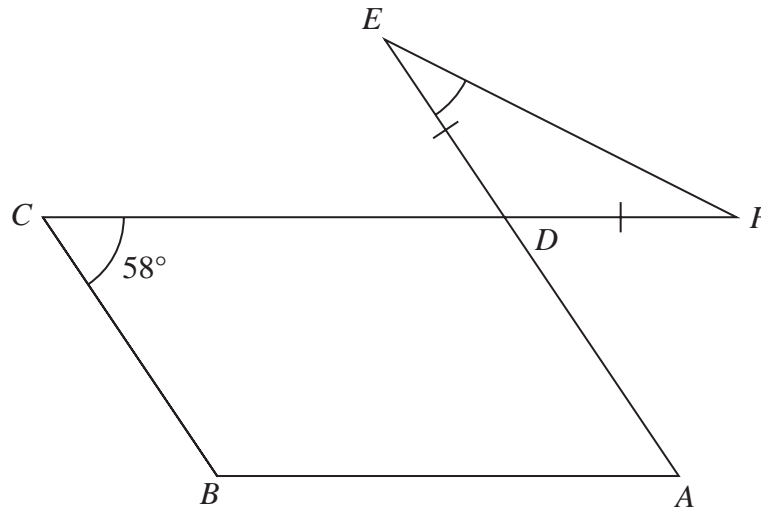


Diagram **NOT**  
accurately drawn

The diagram shows a parallelogram  $ABCD$  and an isosceles triangle  $DEF$  in which  $DE = DF$

$CDF$  and  $ADE$  are straight lines.

Angle  $BCD = 58^\circ$

Work out the size of angle  $DEF$ .

Give a reason for each stage of your working.

(Total for Question 18 is 5 marks)

DO NOT WRITE IN THIS AREA

DO NOT WRITE IN THIS AREA

DO NOT WRITE IN THIS AREA



DO NOT WRITE IN THIS AREA

DO NOT WRITE IN THIS AREA

DO NOT WRITE IN THIS AREA

19 Andreas, Isla and Paulo share some money in the ratios 3 : 2 : 5

The **total** amount of money that Isla and Paulo receive is £76 more than the amount of money that Andreas receives.

Andreas buys a video game for £48.50 with some of his share of the money.

Work out how much money Andreas has left from his share of the money when he has bought the video game.

£.....

(Total for Question 19 is 4 marks)



DO NOT WRITE IN THIS AREA

DO NOT WRITE IN THIS AREA

DO NOT WRITE IN THIS AREA

20 Himari's annual salary is 3 130 000 Japanese Yen (JPY).  
She gets a salary increase of 4%

(a) Work out Himari's salary after this increase.

..... JPY  
(3)

Kaito bought a car.  
The value of the car when Kaito bought it was 750 000 JPY.  
At the end of each year, the value of his car had depreciated by 15%

(b) Work out the value of Kaito's car at the end of 3 years.  
Give your answer correct to the nearest JPY.

..... JPY  
(3)

(Total for Question 20 is 6 marks)



DO NOT WRITE IN THIS AREA

DO NOT WRITE IN THIS AREA

DO NOT WRITE IN THIS AREA

21 (a) Simplify  $g^6 \times g^4$

.....  
(1)

(b) Simplify  $(3cd^4)^2$

.....  
(2)

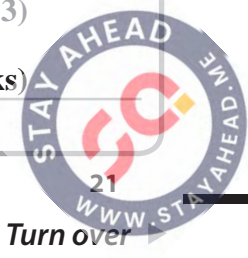
(c) Solve the simultaneous equations

$$\begin{aligned} 4x + 3y &= 17 \\ x + 2y &= 5 \end{aligned}$$

Show clear algebraic working.

$x =$  .....  
 $y =$  .....  
(3)

(Total for Question 21 is 6 marks)



Turn over

22 The diagram shows a right-angled triangle.

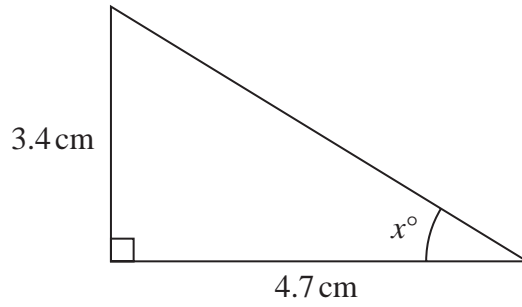


Diagram **NOT** accurately drawn

Calculate the value of  $x$ .  
Give your answer correct to one decimal place.

$x = \dots\dots\dots$

(Total for Question 22 is 3 marks)

DO NOT WRITE IN THIS AREA

DO NOT WRITE IN THIS AREA

DO NOT WRITE IN THIS AREA



DO NOT WRITE IN THIS AREA

DO NOT WRITE IN THIS AREA

DO NOT WRITE IN THIS AREA

23 The diagram shows an isosceles triangle.

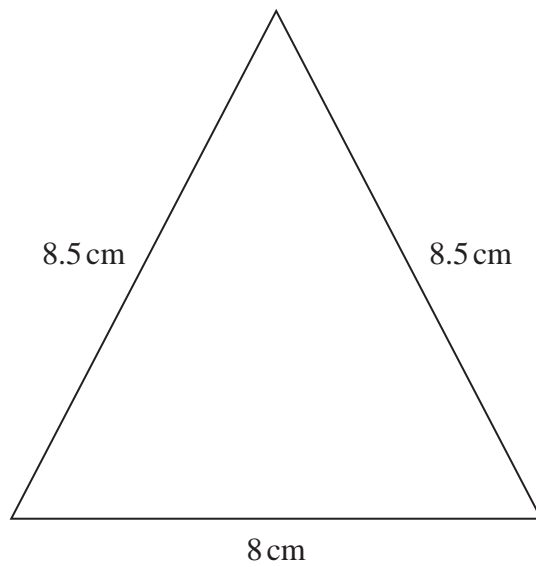


Diagram **NOT** accurately drawn

Work out the area of the triangle.

.....cm<sup>2</sup>

(Total for Question 23 is 4 marks)



Turn over



P 6 2 6 5 4 A 0 2 3 2 4

24 The diagram shows a solid cylinder with radius 3 m.

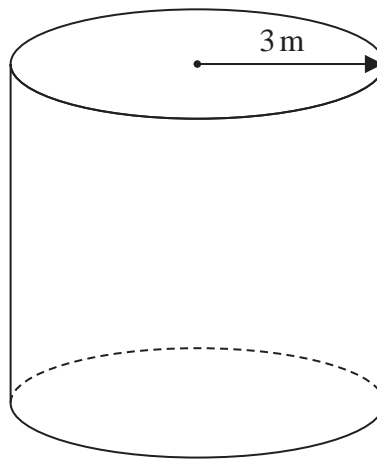


Diagram **NOT** accurately drawn

The volume of the cylinder is  $72\pi \text{ m}^3$

Calculate the **total** surface area of the cylinder.  
Give your answer correct to 3 significant figures.

.....m<sup>2</sup>

(Total for Question 24 is 5 marks)

**TOTAL FOR PAPER IS 100 MARKS**

