

Cambridge International AS & A Level

CANDIDATE
NAME

| |
|--|
| |
|--|

CENTRE
NUMBER

| | | | | |
|--|--|--|--|--|
| | | | | |
|--|--|--|--|--|

CANDIDATE
NUMBER

| | | | |
|--|--|--|--|
| | | | |
|--|--|--|--|

MATHEMATICS

9709/42

Paper 4 Mechanics

May/June 2023

1 hour 15 minutes

You must answer on the question paper.

You will need: List of formulae (MF19)

INSTRUCTIONS

- Answer all questions.
- Use a black or dark blue pen. You may use an HB pencil for any diagrams or graphs.
- Write your name, centre number and candidate number in the boxes at the top of the page.
- Write your answer to each question in the space provided.
- Do **not** use an erasable pen or correction fluid.
- Do **not** write on any bar codes.
- If additional space is needed, you should use the lined page at the end of this booklet; the question number or numbers must be clearly shown.
- You should use a calculator where appropriate.
- You must show all necessary working clearly; no marks will be given for unsupported answers from a calculator.
- Give non-exact numerical answers correct to 3 significant figures, or 1 decimal place for angles in degrees, unless a different level of accuracy is specified in the question.
- Where a numerical value for the acceleration due to gravity (g) is needed, use 10 m s^{-2} .

INFORMATION

- The total mark for this paper is 50.
- The number of marks for each question or part question is shown in brackets [].

This document has **12** pages.

- 1** A particle of mass 1.6 kg is dropped from a height of 9 m above horizontal ground. The speed of the particle at the instant before hitting the ground is 12 m s^{-1} .

Find the work done against air resistance.

[3]

[illegible]

- 2 Two particles A and B , of masses 3.2 kg and 2.4 kg respectively, lie on a smooth horizontal table. A moves towards B with a speed of $v\text{ ms}^{-1}$ and collides with B , which is moving towards A with a speed of 6 ms^{-1} . In the collision the two particles come to rest.

(a) Find the value of v .

[2]

.....

.....

.....

.....

.....

.....

.....

.....

.....

.....

(b) Find the loss of kinetic energy of the system due to the collision.

[2]

.....

.....

.....

.....

.....

.....

.....

.....

.....

.....

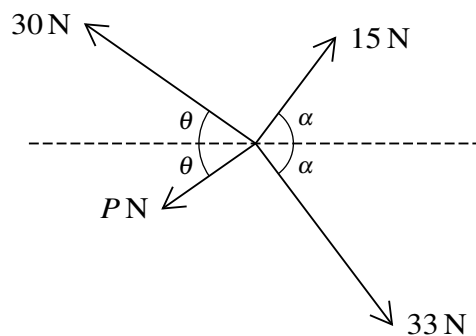
.....

.....

.....

.....

.....



(a) Show that $\left(\frac{14.4}{30-P}\right)^2 + \left(\frac{28.8}{P+30}\right)^2 = 1$. [4]

[illegible]

-
- This image shows a blank sheet of white paper with horizontal ruling lines. The lines are evenly spaced and extend across the width of the page. In the bottom right corner, there is a small circular logo with a blue border and the word "AHEAD" written in white capital letters. The rest of the page is empty.

4 An athlete of mass 84 kg is running along a straight road.

- (a) Initially the road is horizontal and he runs at a constant speed of 3 m s^{-1} . The athlete produces a constant power of 60 W .

Find the resistive force which acts on the athlete. [1]

.....

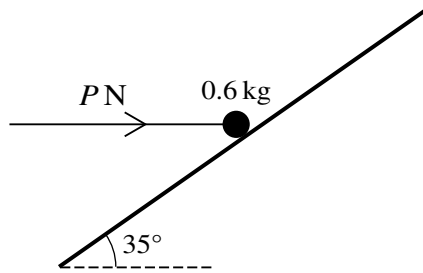
.....

.....

- (b) The athlete then runs up a 150 m section of the road which is inclined at 0.8° to the horizontal. The speed of the athlete at the start of this section of road is 3 m s^{-1} and he now produces a constant driving force of 24 N. The total resistive force which acts on the athlete along this section of road has constant magnitude 13 N.

Use an energy method to find the speed of the athlete at the end of the 150 m section of road. [6]

[illegible]



A particle of mass 0.6 kg is placed on a rough plane which is inclined at an angle of 35° to the horizontal. The particle is kept in equilibrium by a horizontal force of magnitude $P\text{ N}$ acting in a vertical plane containing a line of greatest slope (see diagram). The coefficient of friction between the particle and plane is 0.4 .

Find the least possible value of P .

[6]

[illegible]

- 6 A particle P starts at rest and moves in a straight line from a point O . At time t s after leaving O , the velocity of P , $v \text{ m s}^{-1}$, is given by $v = bt + ct^{\frac{3}{2}}$, where b and c are constants. P has velocity 8 m s^{-1} when $t = 4$ and has velocity 13.5 m s^{-1} when $t = 9$.

(a) Show that $b = 3$ and $c = -0.5$. [1]

.....

.....

.....

.....

(b) Find the acceleration of P when $t = 1$. [2]

.....

.....

.....

.....

.....

.....

.....

.....

.....

(c) Find the positive value of t when P is at instantaneous rest and find the distance of P from O at this instant. [5]

.....

.....

.....

.....

.....

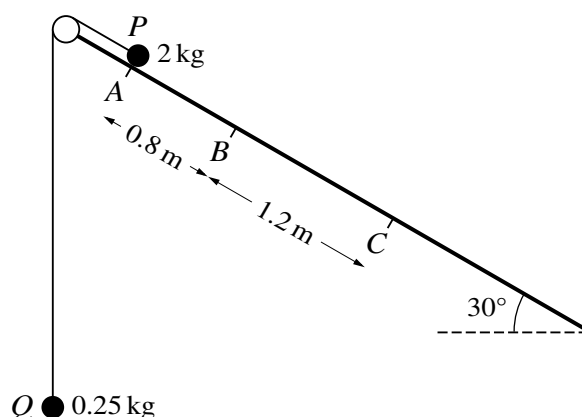
.....

.....

.....

(d) Find the speed of P at the instant it returns to O .

[3]



Two particles P and Q , of masses 2 kg and 0.25 kg respectively, are connected by a light inextensible string that passes over a fixed smooth pulley. Particle P is on an inclined plane at an angle of 30° to the horizontal. Particle Q hangs below the pulley. Three points A , B and C lie on a line of greatest slope of the plane with $AB = 0.8$ m and $BC = 1.2$ m (see diagram).

Particle P is released from rest at A with the string taut and slides down the plane. During the motion of P from A to C , Q does not reach the pulley. The part of the plane from A to B is rough, with coefficient of friction 0.3 between the plane and P . The part of the plane from B to C is smooth.

- (a) (i) Find the acceleration of P between A and B . [4]

This image shows a blank sheet of white paper with horizontal ruling lines. The lines are evenly spaced and extend across the width of the page. In the bottom right corner, there is a small, dark gray circular logo with the word "AHEAD" written in white capital letters. The rest of the page is empty.

(ii) Hence, find the speed of P at C .

[5]

.....

.....

.....

.....

.....

.....

.....

.....

.....

.....

.....

.....

.....

.....

.....

(b) Find the time taken for P to travel from A to C .

[4]

.....

.....

.....

.....

.....

.....

.....

.....

.....

.....

.....



[illegible]

Cambridge Assessment International Education is part of Cambridge Assessment. Cambridge Assessment is the brand name of the University of Cambridge Local Examinations Syndicate (UCLES), which is a department of the University of Cambridge.